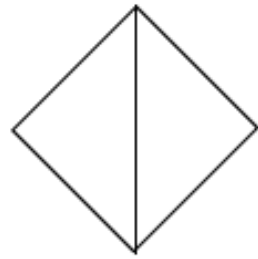

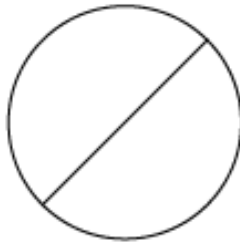


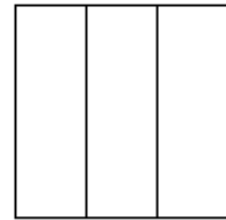


Name _____

Fraction Coloring!

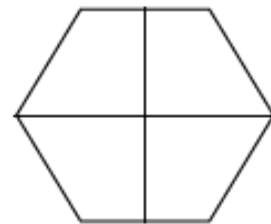
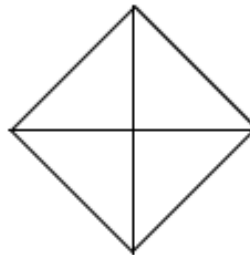
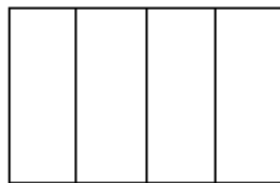
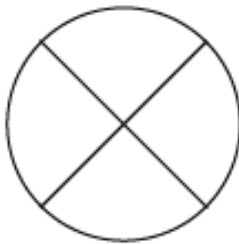
Color $\frac{1}{2}$ blue.



Color $\frac{1}{3}$ red.

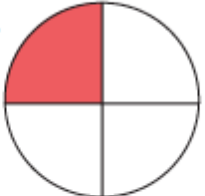



Color $\frac{1}{4}$ green.




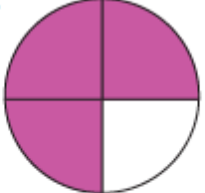
Fractions


What fraction does the colored area show?
Color in the bubble next to the correct answer.

1.  $\frac{1}{2}$ $\frac{3}{4}$ $\frac{1}{4}$ $\frac{1}{3}$

2.  $\frac{2}{3}$ $\frac{2}{4}$ $\frac{1}{4}$ $\frac{1}{2}$

3.  $\frac{3}{4}$ $\frac{1}{2}$ $\frac{2}{3}$ $\frac{1}{3}$

4.  $\frac{2}{4}$ $\frac{3}{4}$ $\frac{1}{3}$ $\frac{1}{4}$

5.  $\frac{3}{4}$ $\frac{1}{3}$ $\frac{2}{4}$ $\frac{2}{3}$