


**1** Divide the circle into 2 equal parts. 

Use words to name 1 part.

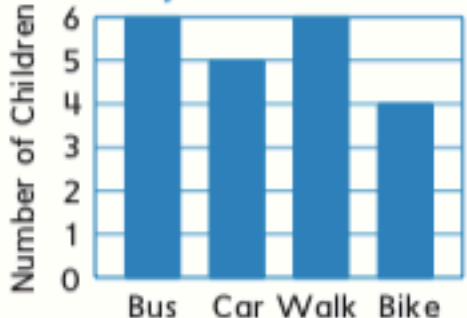
\_\_\_\_\_

Use words to name both parts.

\_\_\_\_\_

**MRB**  
112

**2** **Ways to Get to School**



Way to School	Number of Children
Bus	6
Car	5
Walk	6
Bike	4

How many children in all walk or bike to school? \_\_\_\_\_

**MRB**  
116

**3** What is the value of the digit 4 in each number?

14 \_\_\_\_\_

142 \_\_\_\_\_


436 \_\_\_\_\_

**MRB**  
118

**4** Write the number word for 612.

\_\_\_\_\_

**5** Which number models match the array? Fill in the bubbles next to all the number models that match.



$5 + 5 = 10$

$4 + 4 + 4 + 4 + 4 = 20$

$4 + 4 = 8$

$5 + 5 + 5 + 5 = 20$

**6** Frank shared a sandwich with a friend. He cut it like this:



What part of the sandwich does each child get?

\_\_\_\_\_

**MRB**  
122

