
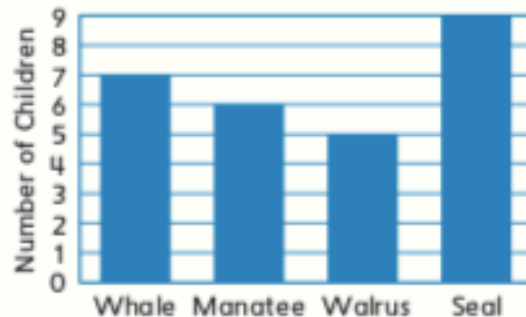


- 1 Divide the circle into 4 equal parts. Use words to name 1 part.
- 

Use words to name all the parts.



- 2 Favorite Water Animals in Ms. Lee's Class



How many children in all like whales or manatees best?



- 3 What is the value of the digit 6 in each number?

26 _____

679 _____

160 _____



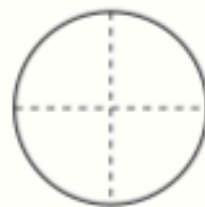
- 4 Write the number word for 840.

- 5 

How many dots are there in all? _____

Write a number model for the array. _____

- 6 Rosita and 3 friends equally shared an orange. How much does each child get?



- One-third
- Two-fourths
- Four-fourths
- One-fourth

